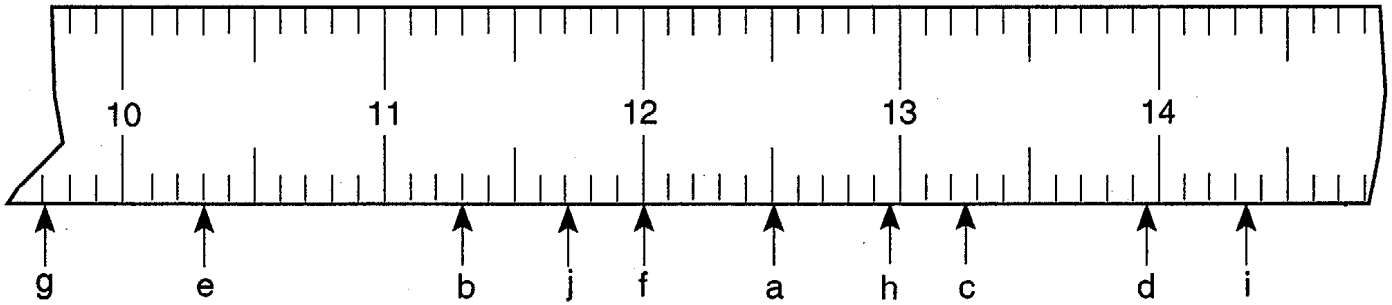


Estimating Length Worksheet

Name _____ Date _____ Period _____

Part 1

Directions: Estimate each letter's position on the ruler below to the nearest tenth of the smallest division on the scale, and record your answers in the space below the ruler.



a. _____

f. _____

b. _____

g. _____

c. _____

h. _____

d. _____

i. _____


e. _____

j. _____


Part 2

Directions: Estimate the horizontal distance in centimeters between the pairs of black dots seen below! Again estimate to the nearest tenth of the smallest division on the scale, and record your answers in the space next to the number.

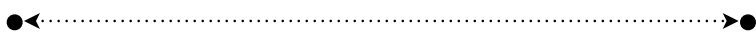
_____ 1.




_____ 2.



_____ 3.



_____ 4.



_____ 5.

